

Name:





Date:


5
total marks








Maths Quiz - 8

1. 5, 10, 15, ,

2.    

3. 

4.  

5.   cm


1 mark

1 mark

1 mark

1 mark

1 mark

Total for
this page

question	answer	marks	notes
1. Complete the following number sequence: 5, 10, 15, _____, _____			
1	20, 25	1	National Curriculum Objective: Count in multiples of 2, 5 and 10 (Year 1)
2. On your sheet you can see four shapes. Put a cross in the middle of the circle.			
2	Child puts a cross in the circle shape	1	National Curriculum Objective: Recognise and name common 2D shapes for example, rectangles (including squares), circles and triangles (Year 1)
3. Can you write the number 23 in this box?			
3	23 – In order for the answer to be correct the child must have the tens and ones in the correct place. The numbers 2 and 3 may be reversed.	1	National Curriculum Objective: Count, read and write numbers to 100 in numerals (Year 1)
4. There were 10 ice creams in the ice cream van. 7 of them were eaten. How many ice creams were left?			
4	3	1	National Curriculum Objective: Solve one-step problems that involve addition and subtraction, using concrete objects and pictorial representations (Year 1)
5. Look at your sheet, how long is the car?			
5	5cm	1	National Curriculum Objective: Measure and begin to record lengths and heights (Year 1)
total		5	