

Name:


Date:

5
total marks

Maths Quiz - 4

twinkl

1.




1 mark

2. 20, 21, 22, 23,



1 mark

3.




1 mark



1 mark

4. $3 + 5 =$



5. $10 - 4 =$



1 mark



Total for this page

question	answer	marks	notes
1. On your sheet you can see some stars. Can you count them carefully?			
1	8	1	National Curriculum Objective: Count to and across 100, forwards and backwards, beginning with 0 or 1, or from any given number (Year 1)
2. Complete the following number sequence: 20, 21, 22, 23, _____, _____			
2	24, 25	1	National Curriculum Objective: Count to and across 100, forwards and backwards, beginning with 0 or 1, or from any given number (Year 1)
3. On your sheet you can see three shapes. Put a ring around the shape with four sides.			
3	square	1	National Curriculum Objective: Recognise and name common 2D shapes for example, rectangles (including squares), circles and triangles (Year 1)
4. There are 3 apples and 5 strawberries. How many pieces of fruit is that altogether?			
4	8	1	National Curriculum Objective: Solve one-step problems that involve addition and subtraction, using concrete objects and pictorial representations (Year 1)
5. There are 10 hedgehogs in the garden. 4 of them are asleep. How many are awake?			
5	6	1	National Curriculum Objective: Solve one-step problems that involve addition and subtraction, using concrete objects and pictorial representations (Year 1)
total		5	