

Name:


Date:

5
total marks


Maths Quiz - 3

twinkl

1. 10, 11, 12, 13, ,




2.



3.

4. Sunday, Monday, , Wednesday



1 mark

1 mark

1 mark

1 mark

1 mark

Total for this page

question	answer		notes
1. Complete the following number sequence: 10, 11, 12, 13, _____, _____			
1	14, 15	1	National Curriculum Objective: Count to and across 100, forwards and backwards, beginning with 0 or 1, or from any given number (Year 1)
2. Count the bears.			
2	8	1	National Curriculum Objective: Count to and across 100, forwards and backwards, beginning with 0 or 1, or from any given number (Year 1)
3. Write the number seven in words (figures).			
3	seven	1	National Curriculum Objective: Read and write numbers from 1 to 20 in numerals and words (Year 1)
4. Have a look at the days of the week on your sheet. One is missing from this sequence. Which day is missing: Thursday, Saturday or Tuesday?			
4	Tuesday	1	National Curriculum Objective: Recognise and use language relating to dates, including days of the week, weeks, months and years (Year 1)
5. There are 2 apples and 8 bananas in the shop. How many pieces of fruit altogether?			
5	10	1	National Curriculum Objective: Solve one-step problems that involve addition and subtraction, using concrete objects and pictorial representations (Year 1)
total		5	